

The food chain

Chose the correct answer.

1 The living thing that can make its own food is a

a- producer

c- decomposer

b- consumer

d- omnivore

2 A living thing that eats other living things is called a

a- food chain

c- consumer

b- decomposer

d- producer

3 An animal that eats plants and other animals is called

a- herbivore

c- omnivore

b- producer

d- carnivore

4 An animal that eats other animals is called

a- omnivore

c- decomposer

b- herbivore

d- carnivore

Animal senses

Name the sense for the following animal body parts.



The food chain

Draw arrows in the right direction to connect between the following organisms in the food chain. Then use the following words to classify them.

Producer

tertiary consumer

secondary consumer

primary consumer






Grass

Grasshopper

Mouse

Owl



Animal stimulus

Fill in the blanks.

1 A is any cause or change in the environment that makes organisms react.

~~~~~

2 A ..... is how an organism reacts to a stimulus and results in a change in behaviour.

~~~~~

3 Stimuli are classified into two types: stimulus, and stimulus.

~~~~~

4 Internal stimuli come from the inside of an organism such as feeling ....., and feeling .....